

Name: _____

Date: _____

Atomic Models
Homework

1. What discoveries concerning the Modern Atomic Theory are each of the following scientists credited with?





a) *Ernest Rutherford*: _____

b) *John Dalton*: _____

c) *J.J. Thompson*: _____

d) *Neils Bohr*: _____

2. Draw each atomic model and identify which scientist is associated with it.

“Nuclear”	“Planetary”	“Billiard Ball”	“Plum Pudding”
			
<i>Name of Scientist</i>	<i>Name of Scientist</i>	<i>Name of Scientist</i>	<i>Name of Scientist</i>

3. Now, in the upper left corner of each box, number each (1 - 4) model in the order in which they occurred.